


3rd Grade Math Worksheet

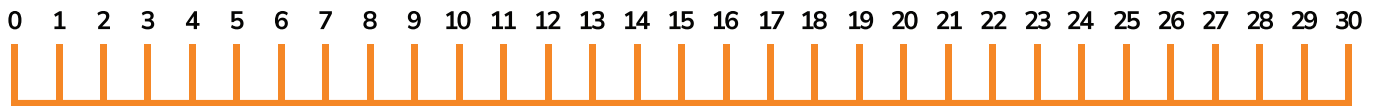
Name: _____

Date: _____

- 1 There are 15 baby chicks at the barn. 12 more chicks are born. How many baby chicks are at the barn now?



- 2 Using the number line, solve $7 + \quad = 22$



- 3 There are 224 Lions fans and 212 Tigers fans at the football game. How many more Lions fans than Tigers fans are at the game?

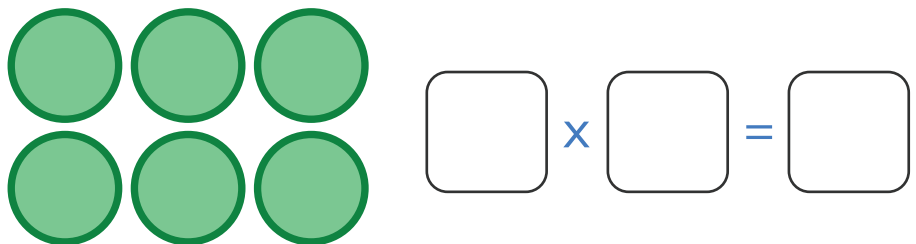


- 4 Gemma has 130 beads for bracelets. She gives 75 beads to Piper and 6 beads to Claire. Which expression shows how to find the total number of beads Gemma has left? Circle the correct answer.

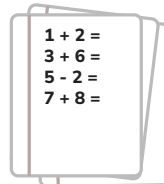


- a) $130 + 75 + 6$
- b) $75 + 6 - 130$
- c) $130 - 75 + 6$
- d) $130 - 75 + 6$

- 5 Using the picture, write a multiplication equation to find the number of shapes.




- 6 Mariela has 8 pages of math homework. There are 4 problems on each page. How many total problems does Mariela have for math homework?



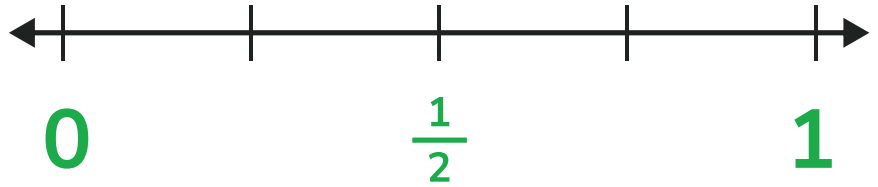
7

Connor has 80 crayons that he will put into crayon boxes. Each crayon box can hold 8 crayons. How many crayon boxes does he need?



8

Plot $\frac{1}{4}$ on this number line:



9

A pizza has 8 slices. Marco ate 2 of the slices. His dad ate the rest. What fraction of the pizza did Marco eat? What fraction of the pizza did his dad eat?



Marco: _____

Dad: _____