


Hexagons Worksheet

Name:

Date:


A hexagon has six sides, a shape that is popular in nature (think: beehives). Practice calculating the properties of a hexagon with the problems below:



A



B



C

①

Identify the regular hexagon in the picture above.

②

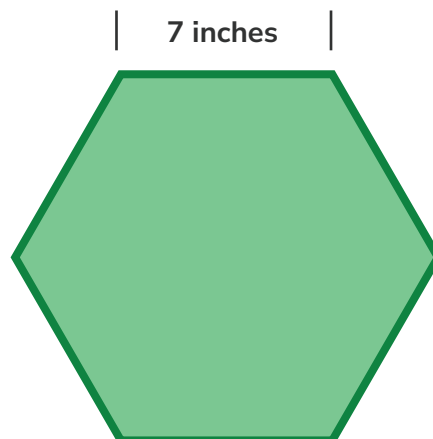
True or false: Figure C in the picture above is a convex hexagon.

③

Identify the rectangular hexagon in the picture above.

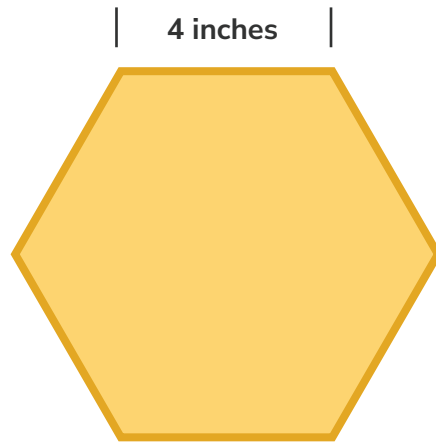
④

What is the perimeter of a regular hexagon with one side that measures 7 inches?



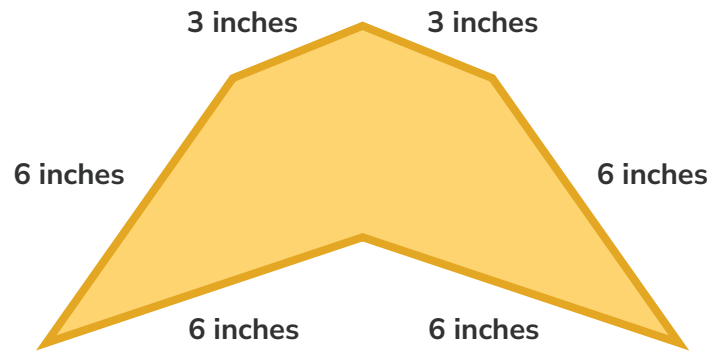
5

If each side of a regular hexagon measures 4 inches, what is the perimeter of the hexagon?



6

What is the perimeter of this irregular hexagon?



7

True or false: A convex hexagon is always a regular hexagon.

8

True or false: A concave hexagon is never a regular hexagon.