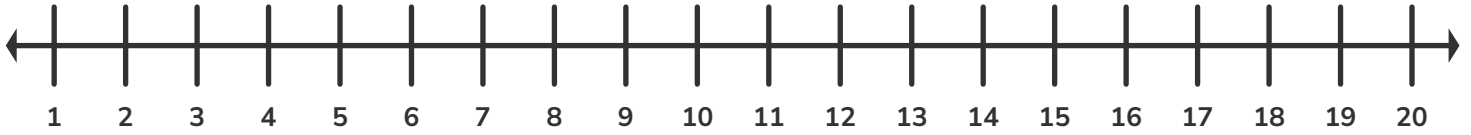


Find the Sum Worksheet

Name: _____

Date: _____

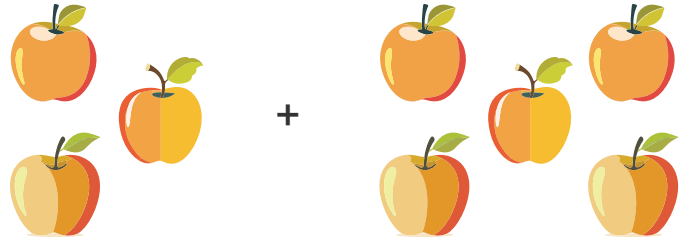
Number line



① Using a number line, find the sum of $3 + 5$


② Using a number line, find the sum of $5 + 6$

③ Lisa has 3 apples. She buys 5 more apples from the store. How many apples does Lisa have in total now?



④ Write a sum to show the total number of bananas and strawberries:

_____ + _____ = _____



5 Which of the following is incorrect?

a) $4 + 6 = 10$

b) $7 + 8 = 15$

c) $5 + 3 = 8$

d) $6 + 7 = 14$

6 Which of the following is incorrect?

a) $6 + 8 = 15$

b) $3 + 6 = 9$

c) $4 + 8 = 12$

d) $2 + 9 = 11$

7 Fill in the blank: $\underline{\quad} + 11 = 18$

8 Fill in the blank: $4 + \underline{\quad} = 13$