

Year 5 Maths Worksheet

Name:

Date:

Solve the following addition and subtraction problems.

①

$$\begin{array}{r} 6,732 \\ -2,332 \\ \hline \end{array}$$

②

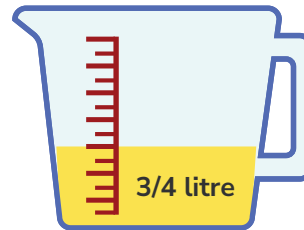
$$\begin{array}{r} 3,416 \\ +1,376 \\ \hline \end{array}$$

③

Lina wants to save £500 to attend summer swimming classes. Her parents pay her £10 every time she walks her dog. How many times will Lina have to walk her dog to earn enough money to pay for swimming classes?

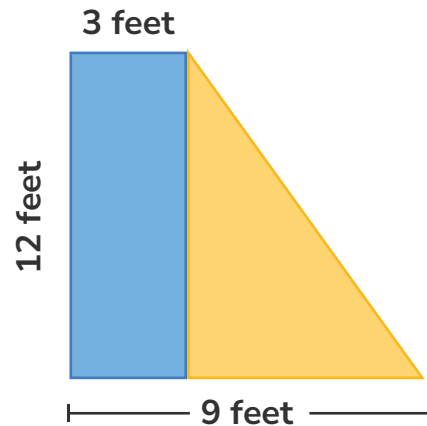
④

If a recipe calls for $\frac{3}{4}$ litre of oil and a baker wants to double the recipe. How many litres of oil does the baker need?



⑤

Calculate the area of the following composite shape.

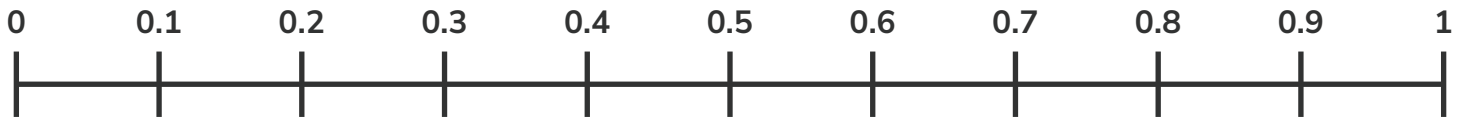


⑥

Round 12,830 to the nearest thousand

7

Estimate the position of 0.38 on the number line.



8

Jay wants to buy some books from the bookstore. He has £15 saved up. Each book costs £4. How many books can Jay buy with his money, and how much money will he have left?